

TABLA NUMÉRICA














1	2	3	4	5	6	7	8	9	10
11	12	13	14	15	16	17	18	19	20
21	22	23	24	25	26	27	28	29	30
31	32	33	34	35	36	37	38	39	40
41	42	43	44	45	46	47	48	49	50
51	52	53	54	55	56	57	58	59	60
61	62	63	64	65	66	67	68	69	70
71	72	73	74	75	76	77	78	79	80
81	82	83	84	85	86	87	88	89	90
91	92	93	94	95	96	97	98	99	100



COMPLETA LA TABLA

1		3	4	5	6	7	8	9	10
11	12	13	14	15	16	17		19	20
21	22	23		25	26	27	28	29	30
31	32	33	34	35		37	38		40
41	42	43	44	45	46	47		49	50
51		53	54	55	56	57	58	59	60
61	62		64		66	67	68	69	70
71	72	73	74	75		77	78	79	80
81	82	83	83	85	86		88	89	90
91	92	93		95	96	97	98		100

¿Qué número es?

1	2	3	4	5	6	7		9	10
11	12	13		15	16	17	18	19	20
21	22	23	24	25	26		28	29	30
31	32	33	34	35	36	37	38		40
41	42	43	44		46	47	48	49	50
51		53	54	55	56	57	58	59	60
61	62		64	65	66	67		69	70
71	72	73	74	75		77	78	79	80
81	82	83		85	86	87	88	89	90
	92	93	94	95	96	97	98	99	100

¿Qué número corresponde a cada dibujo?



=



=



=



=



=




=



=



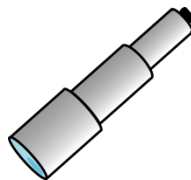
=



=



=



=